
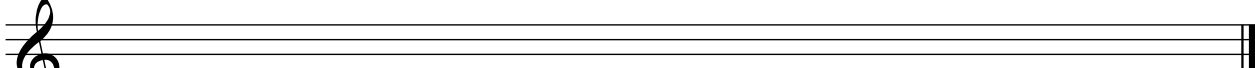


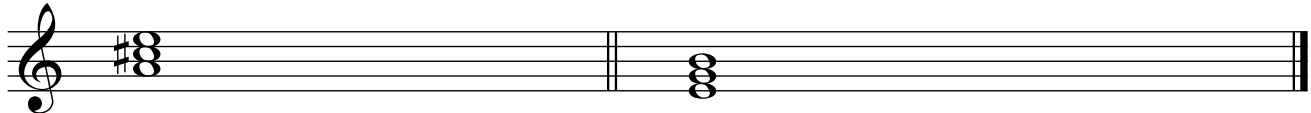
5. Izgradi lestvicu od zadatog tona u smeru strelice:

a)  ----- (6)
 b-mol harmonski ↑

b)  ----- (6)
 As - moldur ↓

Ukupno:
(12)

6. Odredi mnogostranost kvintakorada:



I -----	II -----	----- (6 x 2) <div style="border: 1px solid black; padding: 5px; width: fit-content;"> Ukupno: (12) </div>
IV -----	III -----	
VII -----	V -----	

7. Odgovori sa tačno (T) ili netačno (N):

- a) Valcer je u taktu 3/4. -----
- b) „Vivo” znači živo. -----
- v) M3 ima 2 cela stepena. -----
- g) Frigijski tetrahord naniže gradi se: 1/2+1+1 -----
- d) Mala triola zauzima 1 otkucaj. -----
- đ) „Pianino” znači tiho. -----

----- (6 x 2)
 Ukupno:
 (12)

Komisija: 1.-----
 2.-----
 3.-----

Ukupno:

(100)