

# 8. Takmičenje "Kornelije" 2022.

## Teorija muzike

III kategorija - VI omš  
I grupa

-----  
Ime i prezime učenika

1. Odredi intervale u sledećoj melodiji:

A musical staff in 6/8 time with a key signature of one flat (Bb). The melody consists of 20 notes: G4, A4, Bb4, C5, Bb4, A4, G4, F4, E4, D4, C4, B3, A3, G3, F3, E3, D3, C3, B2, A2.

(20 x 0,5)

Ukupno:

(10)

2. Izgradi trozvuke:

A musical staff with five whole notes: G4, D5, F#4, G4, D4.

P<sub>3</sub>↓

D<sub>4</sub>↑

U<sub>4</sub>↓

M<sub>3</sub>↓

D<sub>3</sub>↓

(5x2)

Ukupno:

(10)

3. Izgradi navise i prepoznaj četvorozvuke:

A musical staff with four whole notes: Bb4, G4, F#4, D4.

MD<sup>7</sup>

P<sup>7</sup>

VM<sup>7</sup>

D<sub>5</sub>

(4x3)

A musical staff with four chords: Bb4, G4, F#4, D4.

(4x3)

Ukupno:

(24)

4. Prepoznaj tonalitete u datoj melodiji:

a)

Musical staff in 6/8 time with a key signature of two sharps (F# and C#). The melody starts with a half note G4 and ends with a half note G4.

Polazni tonalitet:-----

Ciljni tonalitet:-----

(5x2)

b)

Musical staff in 3/4 time with a key signature of three flats (Bb, Eb, and Ab). The melody starts with a half note G3 and ends with a half note G3.


Polazni tonalitet:-----

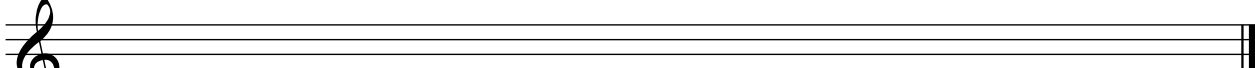
Ciljni tonalitet:-----

Ukupno:

(20)


5. Izgradi lestvicu od zadatog tona u smeru strelice:

a)  ----- (6)  
 cis-mol melodijski ↑

b)  ----- (6)  
 H - moldur ↓

Ukupno:  
(12)

6. Odredi mnogostranost kvintakorada:



I -----	II -----	----- (6 x 2) <div style="border: 1px solid black; padding: 5px; width: fit-content;">                 Ukupno:                  (12)             </div>
IV -----	III -----	
VII -----	V -----	

7. Odgovori sa tačno (T) ili netačno (N):

- a) **Moderato** spada u spor tempo. -----
- b) B je enharmonski ais. -----
- v) **Andnte** je brz tempo. -----
- g) „Legato” je luk za fraziranje. -----
- d) VD septakord ima M7. -----
- đ) „Ligatura” je luk za fraziranje. -----

----- (6 x 2)  

Ukupno:  
 (12)

Komisija: 1.-----  
 2.-----  
 3.-----

**Ukupno:**

(100)