


4. a) Napiši šifru četvorozvuka i odredi tonalitet:



(5x1)

b) U zadatim tonalitetima napiši tražene četvorozvuke:




(4x2)

(13)


A: D₂ f: D₅⁶ g: D₃⁴ D: D⁷

5. a) Prepoznaj septakorde i odredi šifru:



(5x1)

b) Napiši septakorde naviše od zadatog tona:




(4x2)

VD⁷ MM⁷ PU⁷ P⁷

(13)

6. Odredi mnogostranost kvintakorda:



I IV

II V


III VI

VII

(8x1)

(8)

7. a) Napiši tetrahord od zadatog tona i odredi mnogostranost:



D: _____

Molski

G: _____

b) Prepoznaj tetrahord i odredi mnogostranost:



D: _____

(4+4)

G: _____

c) Napiši i utvrdi tip gornjeg tetrahorda u zadatoj lestvici:



(2+2)

g-moll: _____
prirodni

fis-moll: _____
harmonski

(12)

